

# REVISION TEST PAPER-IV





















(Based on Chapters 11 to 12)

Max. Marks : 25

## A. Multiple Choice Questions (MCQs)

(20)

Tick (✓) the correct option.

- ₹ 230 and 8 paise is written as .....  
(a) ₹ 2308  (b) ₹ 230.8   
(c) ₹ 230.08  (d) ₹ 238 
- To convert rupees into paise, you will .....  
(a) multiply by 10  (b) multiply by 100   
(c) divide by 10  (d) divide by 100 
- Which is the highest value coin ?  
(a) 50 p  (b) ₹ 5   
(c) ₹ 1  (d) ₹ 10 
- 1825 p..... ₹ 18.25 .  
(a) is equal to  (b) is less than   
(c) is greater than  (d) all of them 
- If 😊 represents 4 boys, how many boys does 😊😊😊😊 represent ?  
(a) 13 boys  (b) 3 and a half boys   
(c) 7 boys  (d) 16 boys 

## B. Match the following.

(5)

### Column A

- Dollar
- Pound
- Pictograph
- ₹
- Rupees and paise

### Column B

- Pictorial representation of data
- Symbol of rupees
- Currency of USA
- currency of India
- Currency of UK

